



Dear Incoming Third Graders and Parents,

Congratulations on your promotion to third grade!
Third grade will be action packed, and I am looking forward to teaching all of you.

To help you prepare for September, I am assigning summer work to review what you have learned in 2nd grade. Please complete your work carefully and neatly. Included in your summer work folder is a reading log and three book reports. I would like everyone to try and read one book each week. If you need a little help, it is fine to read with mom or dad. I promise you that I will be reading too. We will display our class reading logs and book reports in September. Please return this folder with all completed work on the first day of school.

Hopefully, addition and subtraction facts to 18 have been memorized. If you have not memorized these facts, please make it a priority over the summer. Third grade math is challenging, and it is essential that these facts be memorized before we start chapter 1. **Please understand that third grade math will be difficult if these facts are not committed to memory.**


If you know your addition and subtraction facts, then please start memorizing multiplication facts through 12!

I am also including your supply list for September so you can take advantage of the summer sales on school supplies. I will continue to check my email (mhohner@holysavioracademy.com) over the summer in case anyone needs help or has any questions about our summer work.

Happy summer!

Mrs. Hohner

THIRD GRADE SUPPLY LIST



Qty.	Item
1	large, soft zippered pencil case
12	sharpened pencils
2	pink or white wedge erasers
1	box of crayons (The 24 Crayola pack is recommended.)
1	box of coloring pencils
1	pair of age appropriate scissors
1	large glue stick
1	yellow highlighter
1	12 inch wood ruler
1	2-pocket folder (red)
1	2 pocket folder (green)
1	2 pocket folder of any color or design
1	pair of over- the- ear headphones for use with Chromebooks
1	mouse to use with Chromebooks

APPRECIATED DONATIONS


1 ream of copy paper, 1 box of tissues, 1 roll of paper towels, and 1 box of unscented baby wipes

I've read some COOL books this summer!

Please write the title of each book you have read over the summer.

Name ----- Parent's Signature -----

1.	11.
2.	12.
3.	13.
4.	14.
5.	15.
6.	16.
7.	17.
8.	18.
9.	19.
10.	20.



BOOK REVIEW

of

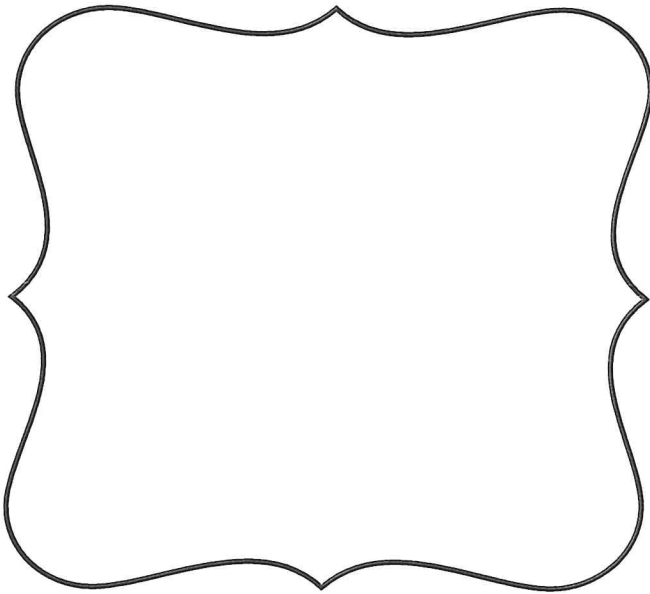
AUTHOR:

RATING:



BOOK COVER (F/NF)

MY FAVORITE PART



MY RATING

I rated this book _____ stars because:


NAME:

DATE:

BOOK REVIEW

of

AUTHOR:

RATING: 

BOOK COVER (F/NF)

GENRE

Fantasy Fiction	Realistic Fiction	Historical Fiction
Traditional Fiction	Nonfiction	Poetry

AUTHOR'S PURPOSE

Persuade	Inform	Entertain
----------	--------	-----------

3 WORDS THAT BEST DESCRIBE THIS BOOK

- 1 _____
- 2 _____
- 3 _____

IDEAS: imaginative surprising educational touching serious interesting silly scary funny sad exciting suspenseful informative

MY RATING

I rated this book _____ stars because:

MY RECOMMENDATION

I would recommend this book to:

NAME:

DATE:

LETTER TO THE AUTHOR

Dear _____,

I just finished reading your book, _____.

I thought the book was very _____. When I first started reading, I thought _____

but then _____.

Your book reminded me of _____

_____. I can tell you wanted me to think about

I thought the most interesting part was _____.

It reminded me of _____

_____. I kept wondering why

If you write another book like this one, I predict _____

_____ and I hope that

Sincerely,

Name: _____

Addition Practice 1

$$\begin{array}{r} 8 \\ + 10 \\ \hline \end{array}$$

$$\begin{array}{r} 6 \\ + 9 \\ \hline \end{array}$$

$$\begin{array}{r} 6 \\ + 8 \\ \hline \end{array}$$

$$\begin{array}{r} 6 \\ + 6 \\ \hline \end{array}$$

$$\begin{array}{r} 3 \\ + 10 \\ \hline \end{array}$$

$$\begin{array}{r} 6 \\ + 10 \\ \hline \end{array}$$

$$\begin{array}{r} 5 \\ + 10 \\ \hline \end{array}$$

$$\begin{array}{r} 5 \\ + 8 \\ \hline \end{array}$$

$$\begin{array}{r} 7 \\ + 6 \\ \hline \end{array}$$

$$\begin{array}{r} 2 \\ + 7 \\ \hline \end{array}$$

$$\begin{array}{r} 5 \\ + 6 \\ \hline \end{array}$$

$$\begin{array}{r} 7 \\ + 8 \\ \hline \end{array}$$

$$\begin{array}{r} 8 \\ + 8 \\ \hline \end{array}$$

$$\begin{array}{r} 3 \\ + 6 \\ \hline \end{array}$$

$$\begin{array}{r} 3 \\ + 8 \\ \hline \end{array}$$

$$\begin{array}{r} 8 \\ + 9 \\ \hline \end{array}$$

$$\begin{array}{r} 4 \\ + 7 \\ \hline \end{array}$$

$$\begin{array}{r} 4 \\ + 8 \\ \hline \end{array}$$

$$\begin{array}{r} 4 \\ + 9 \\ \hline \end{array}$$

$$\begin{array}{r} 5 \\ + 7 \\ \hline \end{array}$$

$$\begin{array}{r} 3 \\ + 7 \\ \hline \end{array}$$

$$\begin{array}{r} 4 \\ + 10 \\ \hline \end{array}$$

$$\begin{array}{r} 2 \\ + 6 \\ \hline \end{array}$$

$$\begin{array}{r} 2 \\ + 8 \\ \hline \end{array}$$

$$\begin{array}{r} 4 \\ + 6 \\ \hline \end{array}$$

Time: _____ minutes Score: _____ out of 25

Name: _____

Date: _____

Addition Practice 2

$$\begin{array}{r} 10 \\ + 9 \\ \hline \end{array}$$

$$\begin{array}{r} 6 \\ + 6 \\ \hline \end{array}$$

$$\begin{array}{r} 6 \\ + 4 \\ \hline \end{array}$$

$$\begin{array}{r} 9 \\ + 2 \\ \hline \end{array}$$

$$\begin{array}{r} 12 \\ + 9 \\ \hline \end{array}$$

$$\begin{array}{r} 9 \\ + 4 \\ \hline \end{array}$$

$$\begin{array}{r} 5 \\ + 9 \\ \hline \end{array}$$

$$\begin{array}{r} 5 \\ + 6 \\ \hline \end{array}$$

$$\begin{array}{r} 7 \\ + 4 \\ \hline \end{array}$$

$$\begin{array}{r} 10 \\ + 10 \\ \hline \end{array}$$

$$\begin{array}{r} 8 \\ + 6 \\ \hline \end{array}$$

$$\begin{array}{r} 11 \\ + 8 \\ \hline \end{array}$$

$$\begin{array}{r} 7 \\ + 10 \\ \hline \end{array}$$

$$\begin{array}{r} 11 \\ + 7 \\ \hline \end{array}$$

$$\begin{array}{r} 7 \\ + 6 \\ \hline \end{array}$$

$$\begin{array}{r} 8 \\ + 8 \\ \hline \end{array}$$

$$\begin{array}{r} 8 \\ + 3 \\ \hline \end{array}$$

$$\begin{array}{r} 7 \\ + 5 \\ \hline \end{array}$$

$$\begin{array}{r} 12 \\ + 7 \\ \hline \end{array}$$

$$\begin{array}{r} 11 \\ + 10 \\ \hline \end{array}$$

$$\begin{array}{r} 6 \\ + 3 \\ \hline \end{array}$$

$$\begin{array}{r} 10 \\ + 2 \\ \hline \end{array}$$

$$\begin{array}{r} 6 \\ + 2 \\ \hline \end{array}$$

$$\begin{array}{r} 10 \\ + 8 \\ \hline \end{array}$$

$$\begin{array}{r} 11 \\ + 5 \\ \hline \end{array}$$

Time: _____ minutes

Score: _____ out of 25

Name: _____

Date: _____

Addition Practice 3

$$\begin{array}{r} 96 \\ + 70 \\ \hline \end{array}$$

$$\begin{array}{r} 22 \\ + 32 \\ \hline \end{array}$$

$$\begin{array}{r} 10 \\ + 46 \\ \hline \end{array}$$

$$\begin{array}{r} 89 \\ + 82 \\ \hline \end{array}$$

$$\begin{array}{r} 18 \\ + 99 \\ \hline \end{array}$$

$$\begin{array}{r} 13 \\ + 61 \\ \hline \end{array}$$

$$\begin{array}{r} 46 \\ + 42 \\ \hline \end{array}$$

$$\begin{array}{r} 70 \\ + 20 \\ \hline \end{array}$$

$$\begin{array}{r} 91 \\ + 88 \\ \hline \end{array}$$

$$\begin{array}{r} 78 \\ + 73 \\ \hline \end{array}$$

$$\begin{array}{r} 38 \\ + 60 \\ \hline \end{array}$$

$$\begin{array}{r} 55 \\ + 20 \\ \hline \end{array}$$

$$\begin{array}{r} 27 \\ + 23 \\ \hline \end{array}$$

$$\begin{array}{r} 15 \\ + 95 \\ \hline \end{array}$$

$$\begin{array}{r} 83 \\ + 91 \\ \hline \end{array}$$

$$\begin{array}{r} 22 \\ + 21 \\ \hline \end{array}$$

$$\begin{array}{r} 36 \\ + 97 \\ \hline \end{array}$$

$$\begin{array}{r} 88 \\ + 54 \\ \hline \end{array}$$

$$\begin{array}{r} 61 \\ + 66 \\ \hline \end{array}$$

$$\begin{array}{r} 42 \\ + 30 \\ \hline \end{array}$$

Name: _____

Date: _____

Addition Practice 4

$$\begin{array}{r} 880 \\ + 298 \\ \hline \end{array}$$

$$\begin{array}{r} 142 \\ + 853 \\ \hline \end{array}$$

$$\begin{array}{r} 256 \\ + 986 \\ \hline \end{array}$$

$$\begin{array}{r} 644 \\ + 181 \\ \hline \end{array}$$

$$\begin{array}{r} 119 \\ + 551 \\ \hline \end{array}$$

$$\begin{array}{r} 796 \\ + 386 \\ \hline \end{array}$$

$$\begin{array}{r} 223 \\ + 134 \\ \hline \end{array}$$

$$\begin{array}{r} 377 \\ + 338 \\ \hline \end{array}$$

$$\begin{array}{r} 494 \\ + 514 \\ \hline \end{array}$$

$$\begin{array}{r} 210 \\ + 941 \\ \hline \end{array}$$

$$\begin{array}{r} 299 \\ + 130 \\ \hline \end{array}$$

$$\begin{array}{r} 314 \\ + 619 \\ \hline \end{array}$$

$$\begin{array}{r} 987 \\ + 449 \\ \hline \end{array}$$

$$\begin{array}{r} 961 \\ + 835 \\ \hline \end{array}$$

$$\begin{array}{r} 814 \\ + 574 \\ \hline \end{array}$$

$$\begin{array}{r} 236 \\ + 230 \\ \hline \end{array}$$

$$\begin{array}{r} 793 \\ + 446 \\ \hline \end{array}$$

$$\begin{array}{r} 398 \\ + 612 \\ \hline \end{array}$$

$$\begin{array}{r} 988 \\ + 576 \\ \hline \end{array}$$

$$\begin{array}{r} 998 \\ + 659 \\ \hline \end{array}$$

Name: _____

Date: _____

Subtraction Practice 1

$$\begin{array}{r} 12 \\ - 5 \\ \hline \end{array}$$

$$\begin{array}{r} 19 \\ - 12 \\ \hline \end{array}$$

$$\begin{array}{r} 7 \\ - 2 \\ \hline \end{array}$$

$$\begin{array}{r} 17 \\ - 8 \\ \hline \end{array}$$

$$\begin{array}{r} 5 \\ - 2 \\ \hline \end{array}$$

$$\begin{array}{r} 14 \\ - 10 \\ \hline \end{array}$$

$$\begin{array}{r} 13 \\ - 8 \\ \hline \end{array}$$

$$\begin{array}{r} 4 \\ - 4 \\ \hline \end{array}$$

$$\begin{array}{r} 11 \\ - 4 \\ \hline \end{array}$$

$$\begin{array}{r} 7 \\ - 3 \\ \hline \end{array}$$

$$\begin{array}{r} 8 \\ - 2 \\ \hline \end{array}$$

$$\begin{array}{r} 8 \\ - 3 \\ \hline \end{array}$$

$$\begin{array}{r} 16 \\ - 10 \\ \hline \end{array}$$

$$\begin{array}{r} 13 \\ - 11 \\ \hline \end{array}$$

$$\begin{array}{r} 10 \\ - 10 \\ \hline \end{array}$$

$$\begin{array}{r} 12 \\ - 3 \\ \hline \end{array}$$

$$\begin{array}{r} 5 \\ - 3 \\ \hline \end{array}$$

$$\begin{array}{r} 13 \\ - 7 \\ \hline \end{array}$$

$$\begin{array}{r} 15 \\ - 8 \\ \hline \end{array}$$

$$\begin{array}{r} 14 \\ - 11 \\ \hline \end{array}$$

$$\begin{array}{r} 11 \\ - 6 \\ \hline \end{array}$$

$$\begin{array}{r} 8 \\ - 8 \\ \hline \end{array}$$

$$\begin{array}{r} 6 \\ - 3 \\ \hline \end{array}$$

$$\begin{array}{r} 6 \\ - 2 \\ \hline \end{array}$$

$$\begin{array}{r} 6 \\ - 6 \\ \hline \end{array}$$

Time: _____ minutes Score: _____ out of 25

Name: _____

Date: _____

Subtraction Practice 2

$$\begin{array}{r} 14 \\ - 9 \\ \hline \end{array}$$

$$\begin{array}{r} 15 \\ - 5 \\ \hline \end{array}$$

$$\begin{array}{r} 10 \\ - 6 \\ \hline \end{array}$$

$$\begin{array}{r} 9 \\ - 3 \\ \hline \end{array}$$

$$\begin{array}{r} 17 \\ - 9 \\ \hline \end{array}$$

$$\begin{array}{r} 15 \\ - 9 \\ \hline \end{array}$$

$$\begin{array}{r} 6 \\ - 2 \\ \hline \end{array}$$

$$\begin{array}{r} 16 \\ - 7 \\ \hline \end{array}$$

$$\begin{array}{r} 16 \\ - 10 \\ \hline \end{array}$$

$$\begin{array}{r} 7 \\ - 3 \\ \hline \end{array}$$

$$\begin{array}{r} 19 \\ - 12 \\ \hline \end{array}$$

$$\begin{array}{r} 15 \\ - 6 \\ \hline \end{array}$$

$$\begin{array}{r} 13 \\ - 7 \\ \hline \end{array}$$

$$\begin{array}{r} 20 \\ - 10 \\ \hline \end{array}$$

$$\begin{array}{r} 12 \\ - 3 \\ \hline \end{array}$$

$$\begin{array}{r} 12 \\ - 5 \\ \hline \end{array}$$

$$\begin{array}{r} 10 \\ - 5 \\ \hline \end{array}$$

$$\begin{array}{r} 16 \\ - 12 \\ \hline \end{array}$$

$$\begin{array}{r} 18 \\ - 8 \\ \hline \end{array}$$

$$\begin{array}{r} 11 \\ - 6 \\ \hline \end{array}$$

$$\begin{array}{r} 7 \\ - 2 \\ \hline \end{array}$$

$$\begin{array}{r} 12 \\ - 2 \\ \hline \end{array}$$

$$\begin{array}{r} 20 \\ - 11 \\ \hline \end{array}$$

$$\begin{array}{r} 18 \\ - 11 \\ \hline \end{array}$$

$$\begin{array}{r} 17 \\ - 10 \\ \hline \end{array}$$

Time: _____ minutes Score: _____ out of 25

Name: _____

Date: _____

Subtraction Practice 3

$$\begin{array}{r} 60 \\ - 5 \\ \hline \end{array}$$

$$\begin{array}{r} 54 \\ - 23 \\ \hline \end{array}$$

$$\begin{array}{r} 45 \\ - 44 \\ \hline \end{array}$$

$$\begin{array}{r} 59 \\ - 2 \\ \hline \end{array}$$

$$\begin{array}{r} 43 \\ - 25 \\ \hline \end{array}$$

$$\begin{array}{r} 32 \\ - 8 \\ \hline \end{array}$$

$$\begin{array}{r} 66 \\ - 7 \\ \hline \end{array}$$

$$\begin{array}{r} 29 \\ - 7 \\ \hline \end{array}$$

$$\begin{array}{r} 42 \\ - 21 \\ \hline \end{array}$$

$$\begin{array}{r} 28 \\ - 11 \\ \hline \end{array}$$

$$\begin{array}{r} 82 \\ - 32 \\ \hline \end{array}$$

$$\begin{array}{r} 63 \\ - 46 \\ \hline \end{array}$$

$$\begin{array}{r} 19 \\ - 2 \\ \hline \end{array}$$

$$\begin{array}{r} 39 \\ - 17 \\ \hline \end{array}$$

$$\begin{array}{r} 40 \\ - 26 \\ \hline \end{array}$$

$$\begin{array}{r} 20 \\ - 13 \\ \hline \end{array}$$

$$\begin{array}{r} 77 \\ - 76 \\ \hline \end{array}$$

$$\begin{array}{r} 73 \\ - 5 \\ \hline \end{array}$$

$$\begin{array}{r} 96 \\ - 1 \\ \hline \end{array}$$

$$\begin{array}{r} 56 \\ - 23 \\ \hline \end{array}$$

Name: _____

Date: _____

Subtraction

$$\begin{array}{r} 712 \\ - 20 \\ \hline \end{array}$$

$$\begin{array}{r} 555 \\ - 48 \\ \hline \end{array}$$

$$\begin{array}{r} 622 \\ - 42 \\ \hline \end{array}$$

$$\begin{array}{r} 198 \\ - 18 \\ \hline \end{array}$$

$$\begin{array}{r} 573 \\ - 34 \\ \hline \end{array}$$

$$\begin{array}{r} 309 \\ - 17 \\ \hline \end{array}$$

$$\begin{array}{r} 111 \\ - 94 \\ \hline \end{array}$$

$$\begin{array}{r} 720 \\ - 14 \\ \hline \end{array}$$

$$\begin{array}{r} 375 \\ - 11 \\ \hline \end{array}$$

$$\begin{array}{r} 325 \\ - 77 \\ \hline \end{array}$$

$$\begin{array}{r} 731 \\ - 99 \\ \hline \end{array}$$

$$\begin{array}{r} 550 \\ - 53 \\ \hline \end{array}$$

$$\begin{array}{r} 502 \\ - 88 \\ \hline \end{array}$$

$$\begin{array}{r} 335 \\ - 92 \\ \hline \end{array}$$

$$\begin{array}{r} 506 \\ - 72 \\ \hline \end{array}$$

$$\begin{array}{r} 107 \\ - 32 \\ \hline \end{array}$$

$$\begin{array}{r} 948 \\ - 86 \\ \hline \end{array}$$

$$\begin{array}{r} 477 \\ - 47 \\ \hline \end{array}$$

$$\begin{array}{r} 209 \\ - 82 \\ \hline \end{array}$$

$$\begin{array}{r} 166 \\ - 63 \\ \hline \end{array}$$

Name: _____

Date: _____

Subtraction Practice 5

$$\begin{array}{r} 314 \\ - 109 \\ \hline \end{array}$$

$$\begin{array}{r} 769 \\ - 733 \\ \hline \end{array}$$

$$\begin{array}{r} 147 \\ - 138 \\ \hline \end{array}$$

$$\begin{array}{r} 973 \\ - 481 \\ \hline \end{array}$$

$$\begin{array}{r} 717 \\ - 207 \\ \hline \end{array}$$

$$\begin{array}{r} 792 \\ - 172 \\ \hline \end{array}$$

$$\begin{array}{r} 618 \\ - 209 \\ \hline \end{array}$$

$$\begin{array}{r} 417 \\ - 157 \\ \hline \end{array}$$

$$\begin{array}{r} 223 \\ - 155 \\ \hline \end{array}$$

$$\begin{array}{r} 469 \\ - 389 \\ \hline \end{array}$$

$$\begin{array}{r} 511 \\ - 102 \\ \hline \end{array}$$

$$\begin{array}{r} 884 \\ - 622 \\ \hline \end{array}$$

$$\begin{array}{r} 219 \\ - 168 \\ \hline \end{array}$$

$$\begin{array}{r} 606 \\ - 412 \\ \hline \end{array}$$

$$\begin{array}{r} 381 \\ - 177 \\ \hline \end{array}$$

$$\begin{array}{r} 858 \\ - 315 \\ \hline \end{array}$$

$$\begin{array}{r} 303 \\ - 197 \\ \hline \end{array}$$

$$\begin{array}{r} 635 \\ - 113 \\ \hline \end{array}$$

$$\begin{array}{r} 109 \\ - 101 \\ \hline \end{array}$$

$$\begin{array}{r} 773 \\ - 753 \\ \hline \end{array}$$

Name: _____

Rounding to the Nearest Ten



Round each number to the nearest ten.

a. 38 _____

b. 24 _____

c. 54 _____

d. 3 _____

e. 87 _____

f. 98 _____

g. 65 _____

h. 57 _____

i. 44 _____

j. 19 _____

k. 77 _____

l. 35 _____

m. 59 _____

n. 83 _____

o. 22 _____

p. 12 _____

q. 68 _____

r. 63 _____

s. 1 _____

t. 71 _____

u. Cole baked 72 cupcakes. Round this number to the nearest ten.

v. Claire baked 27 brownies. Round this number to the nearest ten.

Name: _____

Rounding to the Nearest Hundred

Round each number to the nearest hundred.

a. 465 _____

b. 945 _____

c. 902 _____

d. 123 _____

e. 834 _____

f. 391 _____

g. 498 _____

h. 854 _____

i. 69 _____

j. 268 _____

k. 110 _____

l. 893 _____

m. 345 _____

n. 688 _____

o. 238 _____

p. 835 _____

q. 469 _____

r. 384 _____

s. 575 _____

t. 629 _____



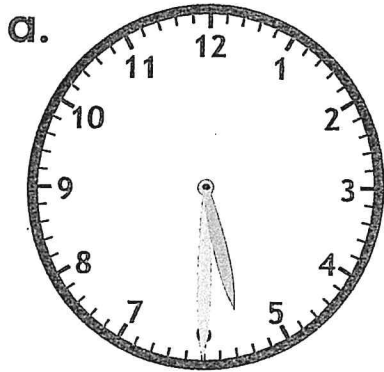
u. Craig is an auto mechanic. He has 51 lug nuts in a bucket. Round this number to the nearest hundred. _____

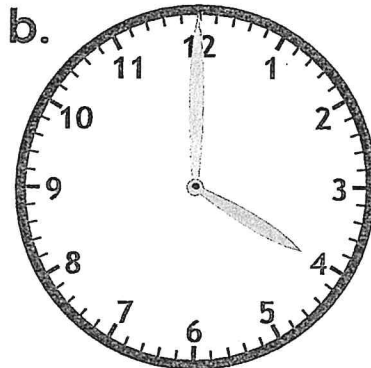
v. Craig repaired 348 cars this year. Round this number to the nearest hundred. _____

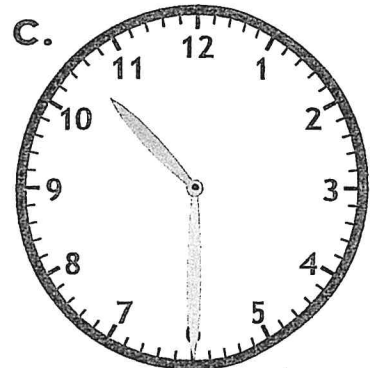
Name: _____

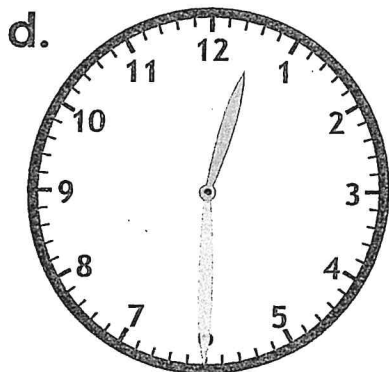
Telling Time

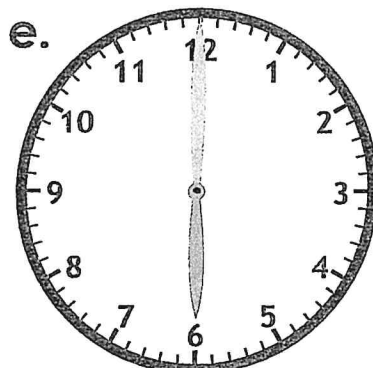
Write the time shown.

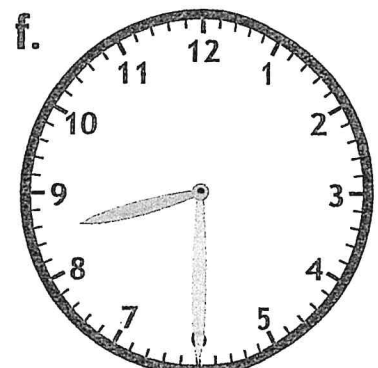










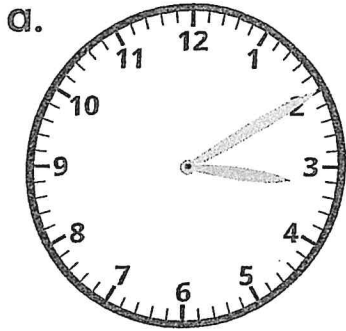


Name: _____

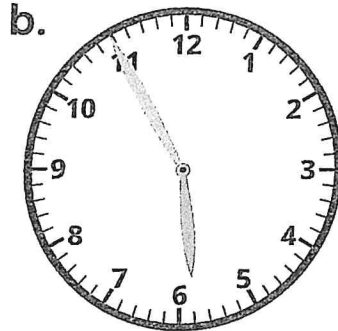
Time to the Nearest 5 Minutes

Telling Time

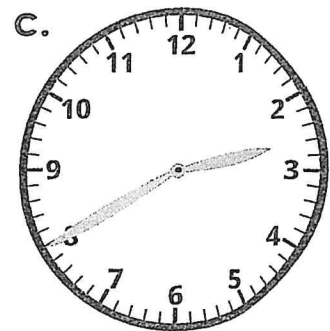
Write the time shown on each clock.



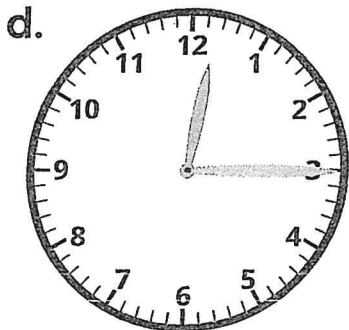
_____ : _____



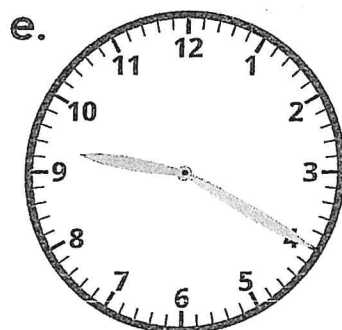
_____ : _____



_____ : _____



_____ : _____



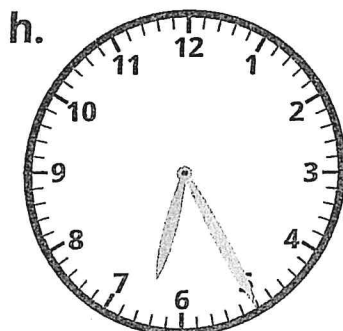
_____ : _____



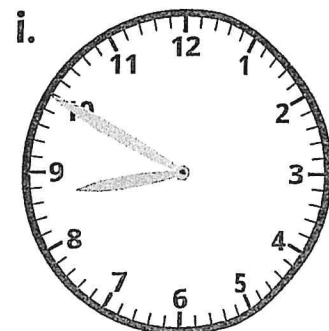
_____ : _____



_____ : _____



_____ : _____



_____ : _____

Name: _____

Noun Review

Write **noun** next to the words that are nouns. Write **not a noun** next to the words that are not nouns.

1. big _____

7. snowflake _____

2. bird _____

8. sing _____

3. cookie _____

9. milk _____

4. monster _____

10. squeeze _____

5. chair _____

11. look _____

6. sit _____

12. street _____

Write the word **singular** next to the nouns that refer to one person, place or thing. Write **plural** next to nouns that refer to more than one person, place or thing.

13. crowns _____

20. mice _____

14. men _____

21. feet _____

15. hand _____

22. woman _____

16. fingers _____

23. people _____

17. women _____

24. fox _____

18. man _____

25. knives _____

19. cow _____

26. home _____

Name: _____

Noun Review

Circle the **nouns** in the sentences below.

27. The boy washed his hands with soap.

28. Samantha was thinking about her little, brown dog.

29. Jen picked up her pencil and drew a picture on the yellow paper.

30. Adam ate two giant cookies after school.

31. Monica cleaned her entire bedroom from ceiling to floor.

32. Michael was outside playing catch with the football.

33. The window on the garage is open.

34. Nicole hears the rain falling on the sidewalk.

35. Can Max play with the kitten?

36. The old goose honked as it flew through the air.

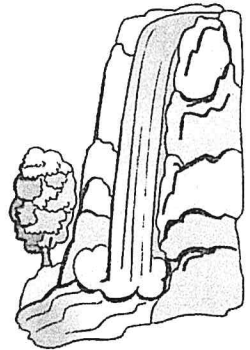
Name: _____

Common and Proper Nouns

Determine whether each noun is a common noun or a proper noun.

- If the noun is common, write common noun on the line.
- If the noun is proper, re-write the noun on the line using correct capitalization.

examples:	waterfall	<u>common noun</u>
	niagara falls	<u>Niagara Falls</u>



- | | | | |
|-----------------|-------|-----------------|-------|
| 1. march | _____ | 2. month | _____ |
| 3. day | _____ | 4. tuesday | _____ |
| 5. holiday | _____ | 6. christmas | _____ |
| 7. cereal | _____ | 8. cheerios | _____ |
| 9. dr. gomez | _____ | 10. doctor | _____ |
| 11. city | _____ | 12. boston | _____ |
| 13. street | _____ | 14. main street | _____ |
| 15. burger king | _____ | 16. restaurant | _____ |
| 17. slate creek | _____ | 18. creek | _____ |
| 19. dog | _____ | 20. snoopy | _____ |

★ **Challenge:** Write a complete sentence that has a proper noun and a common noun in it.

Name: _____

Plural Nouns

A noun that names only one thing is a **singular noun**.

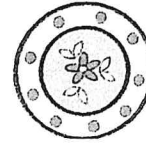
examples: book, dish

A noun that names more than one thing is a **plural noun**.


examples: books, dishes

Most singular nouns can be made plural by just adding an **s** to the end.

Nouns ending in **x, z, s, sh** and **ch** form the plural by adding an **es** to the end.



Singular: I have a colorful dish.



Plural: I have lots of colorful dishes.

Add an s or es at the end of each word to form the plural.

- | | | | |
|-------------|-------|-----------|-------|
| 1. flower | _____ | 2. tool | _____ |
| 3. box | _____ | 4. tree | _____ |
| 5. flash | _____ | 6. church | _____ |
| 7. lunch | _____ | 8. apple | _____ |
| 9. peach | _____ | 10. truck | _____ |
| 11. waltz | _____ | 12. crash | _____ |
| 13. blanket | _____ | 14. tax | _____ |
| 15. dog | _____ | 16. egg | _____ |
| 17. car | _____ | 18. beach | _____ |
| 19. wish | _____ | 20. cloud | _____ |

Challenge: On the back of this paper, write a complete sentence that has a singular noun and a plural noun in it.

Name: _____

Action Verbs

An action verb is a word that shows what someone or something is doing.

examples: Mary sleeps on the couch.

Jason's best friend thinks of a plan.

Ken and his mother cook dinner.



Circle the action verb in each sentence.

1. Sal listens to his favorite song.
2. Craig hits the baseball over the fence.
3. The little pig grunts.
4. The roof of the house leaks.
5. The hunter searches for a deer.
6. Dr. Gold examines his patient.
7. The bluebird in the tree sings beautifully.
8. The football team dashes out of the locker room.
9. Paul reads *The Adventures of Tom Sawyer*.
10. Mrs. Gray buys a roll of paper towels at the store.
11. Judy solves the mystery.
12. Harold finds a purple crayon.

Name: _____

Action Verbs

Tell whether each word is an action verb or noun. Write the words action verb next to each action verb. Write the word noun next to each noun.

13. swims _____

20. basketball _____

14. thinks _____

21. plays _____

15. sneezes _____

22. relaxes _____

16. clock _____

23. grass _____

17. tooth _____

24. game _____

18. drives _____

25. writes _____

19. takes _____

26. book _____

Write a sentence with an action verb to describe each picture. Underline the action verb.

27.



28.




29.



Name: _____

Alien Adjectives



Circle the adjective in each sentence.
Then, tell what noun the adjective is describing.

examples: The green alien walked out of the spaceship.
The adjective green describes the alien.

1. The shiny spaceship landed in my yard.

The adjective _____ describes _____

2. An alien with big eyes walked out of the ship.

The adjective _____ describes _____

3. It waved its tiny hand in the air.

The adjective _____ describes _____

4. The alien said, "Earth is such a beautiful planet."

The adjective _____ describes _____

5. A brown rabbit hopped into the yard and scared the alien.

The adjective _____ describes _____

6. The frightened alien ran back into its spaceship and blasted off.

The adjective _____ describes _____

Name: _____

Adjectives

An adjective is a word that describes a noun.

example: Mr. Johnson has a long beard.

The word *long* is an adjective. It describes the noun, *beard*.



In each sentence, circle the adjective that describes the underlined noun.

1. Leroy and Jenna walked up to an old castle.
2. Maddie put the golden key in the lock.
3. Today is the fifth day of January.
4. The baby birds flew from the nest.
5. Joe's truck has a flat tire.

Circle the adjective in each sentence. Underline the noun that it describes.

6. I am holding a marker in my left hand.
7. Patricia played beautiful music on her guitar.
8. Has anyone read Caitlyn's latest story?
9. The sly fox outsmarted the chicken.
10. Miguel built a large bookshelf.

